

## September Industrial Action



**Class: Primary 6**

**Class Teacher(s): Mrs Sommerville/ Miss Petrie**


Whilst some staff are engaging in industrial action, the following activities have been planned for your child to complete at home. Please try to complete as much as you can, either indoors or outdoors.

<p><b>Literacy</b></p>	<p><i>Write a summary of your book so far. As well as the story, try to include your own opinion – who is your favourite character and why? What has been your favourite part and why?</i></p>	<p><i>Create an acrostic about Autumn. Decorate it appropriately. If you use Word you could insert some clip art.</i></p>	<p><i>Log onto <a href="https://www.topmarks.co.uk/english-games/7-11-years/spelling-and-grammar">https://www.topmarks.co.uk/english-games/7-11-years/spelling-and-grammar</a> Play Noun explorer, verbs in space and adjective adventure</i></p>
<p><b>Numeracy</b></p>	<p><i>Log onto <a href="https://www.transum.org/Software/Game/Discombobulated/">https://www.transum.org/Software/Game/Discombobulated/</a> Record your highest score. Perhaps you could challenge a parent or sibling?</i></p>	<p><b><u>Number of the Day</u></b> 394      80</p> <p style="text-align: center;"><i>Double it Half it Multiply it by 5 Add 70 Subtract 43</i></p>	<p><i>Have a shape scavenger hunt around your house and garden. How many 2D and 3D shapes can you find and name?</i></p>
<p><b>Health and Wellbeing/ Interdisciplinary Learning (Topic)</b></p>	<p><b><u>Body Coach workout</u></b></p> <p>Try this Body Coach workout or pick your own.</p> <p><a href="#">NEW!!! 15 Minute Full Body Fat Burner   The Body Coach TV - YouTube</a></p>	<p><b><u>Dice-ercises</u></b></p> <p>Roll a dice.... let's get moving!! Do the activity that matches the number that you roll! Do each activity for 30 seconds.</p> <p>1 – Squats    2 – Frog jumps 3 – Lunges    4 – Arm circles 5 – Jumping Jacks 6 – Ladder climbs</p>	<p><b><u>Internet Safety</u></b></p> <p><i>Make a list of at least 5 important internet safety tips. Play Interland to help you remember!</i></p> <p><a href="https://beinternetawesome.withgoogle.com/en_us/interland">https://beinternetawesome.withgoogle.com/en_us/interland</a></p>


Have a go at these 3- and 4-digit subtraction problem solving questions.

Remember to write them out in standard written method.


*You could self-mark your answers using a calculator!*

- 1)  There are 678 clownfish and angelfish in a tank. 425 of the fish are clownfish. How many are angelfish?


There are \_\_\_\_\_ angelfish.

- 2)  Season 1 of the show Salamanderville lasts 759 minutes. I have watched 412 minutes of the show. How many more minutes is there to watch?


There is \_\_\_\_\_ more minutes to watch.

- 3)  Tyger and Frazer collect stamps. Tyger has 875 stamps. Frazer has 243 stamps fewer. How many stamps does Frazer have?


Frazer has \_\_\_\_\_ stamps.

- 4)  679 people are at Main Street Station. 213 people board different trains. How many people are at the station now?


There are \_\_\_\_\_ people at the station now.

- 5)  Sally and Newton go fishing and catch 577 fish. Newton catches 316 of the fish. How many does Sally catch?


Sally catches \_\_\_\_\_ fish.

- 6)  There are 589 adult puffin and 273 pufflings (puffin chicks) on an island. How many more adults than pufflings?


There are \_\_\_\_\_ more adult puffin.

- 1)  6574 people visit the zoo on Monday. On Tuesday, 4794 people visit. How many fewer people visited?


*There were \_\_\_\_\_ fewer people on Tuesday.*

- 2)  There are 8265 ants in a colony. 3817 ants leave the colony to find food. How many are left?


*There are \_\_\_\_\_ ants left in the colony.*

- 3)  Tyger and Flame both write a story. Tyger's story is 4624 words long. Flame's story is 6195 words long. How many fewer words are in Tyger's story?


*Tyger's story has \_\_\_\_\_ fewer words.*

- 4)  Newton has 4000 frequent flyer miles to use. He uses up 3724 of them. How many does he have left?

*He has \_\_\_\_\_ more air miles to use.*

- 5)  A theatre has a capacity of 2286 seats. During a performance, 938 seats are empty. How many seats are filled?

*\_\_\_\_\_ of the seats are filled.*

- 6)  A large truck has a 7500 gallon tank. There are currently 1828 gallons of gas in the tank. How much more gas can be added?

*\_\_\_\_\_ more gallons can be added.*