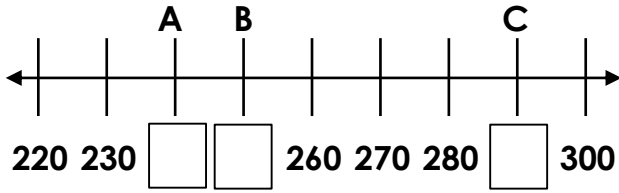


Home Learning Pack Year 3

Ordering Numbers

1a. Fill the gaps in the number line using the numbers below.



290

250

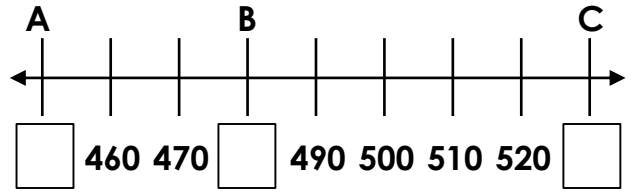
240



VF

Ordering Numbers

1b. Fill the gaps in the number line using the numbers below.



480

530

450



VF

2a. Put these numbers in ascending order.

570

730

590

_____ , _____ , _____



VF

2b. Put these numbers in ascending order.

930

380

310

_____ , _____ , _____



VF

3a. What is each representation worth?

		$200 + 90$
A =	B =	C =

List the numbers in ascending order.



_____ , _____ , _____

VF

3b. What is each representation worth?

$400 + 30$		
A =	B =	C =

List the numbers in ascending order.



_____ , _____ , _____

VF

4a. True or false? Lewis has placed three numbers in ascending order.

410
380
430



VF

4b. True or false? Frank has placed three numbers in ascending order.



790
800
880



VF

Ordering Numbers

1a. Phoenix the parrot wants to reach the peach. He can only go through the maze by stepping on ascending numbers.


 → 240	250	
220	230	260
210	290	240

 How many routes can he take?

PS

Ordering Numbers

1b. Oka the panda wants to reach the plant. She can only go through the maze by stepping on ascending numbers.

 → 470	500	480
490	570	540
530		520

 How many routes can she take?

PS

2a. Luke and Gavin are placing numbers in ascending order.



630	670	710
-----	-----	-----



280	410	380
-----	-----	-----

Who is correct? Prove it.



R

2b. Leila and Evie are placing numbers in ascending order.



930	960	950
-----	-----	-----




530	550	580
-----	-----	-----

Who is correct? Prove it.



PS

3a. Choose between 5 and 10 place value counters each time to create 3 different 3-digit numbers.



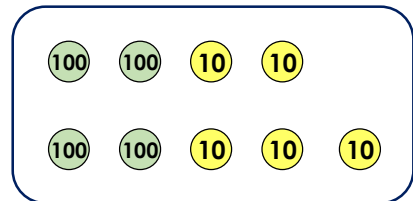
Write the numbers that you have created below in ascending order.

_____ , _____ , _____



PS

3b. Choose between 5 and 10 place value counters each time to create 3 different 3-digit numbers.



Write the numbers you have created below in ascending order.

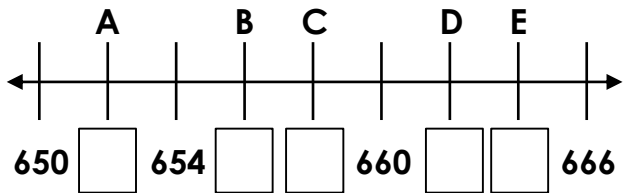
_____ , _____ , _____



R

Ordering Numbers

1a. Fill the gaps in the number line using the numbers below.



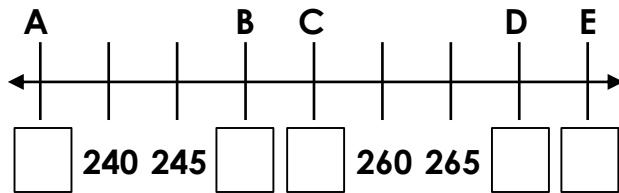
- 662
- 658
- 664
- 656
- 652



VF

Ordering Numbers

1b. Fill the gaps in the number line using the numbers below.



- 270
- 250
- 255
- 235
- 275



VF

2a. Put these numbers in ascending order.

- 426
- 381
- 329
- 894
- 677

_____ ' _____ ' _____ ' _____ ' _____



VF

2b. Put these numbers in descending order.

- 576
- 903
- 567
- 799
- 652

_____ ' _____ ' _____ ' _____ ' _____



VF

3a. What is each representation worth?

		$300 + 40 + 6$
A =	B =	C =

List the numbers in descending order.



VF

3b. What is each representation worth?

$600 + 87$		
A =	B =	C =

List the numbers in ascending order.



VF

4a. True or false? Lucie has placed these five numbers in ascending order.

670
767
676
776
777



VF

4b. True or false? Fiona has placed these five numbers in descending order.


882
849
797
658
685




VF

Ordering Numbers

1a. Jerry the giraffe wants to reach the apple. He can only go through the maze by stepping on ascending numbers.

715	716	718	721
719	721	724	730 → 
716	720	722	727
→ 715	716	718	719





 How many routes can he take?

PS

Ordering Numbers


1b. Elsie the elephant wants to reach the pear. She can only go through the maze by stepping on descending numbers.

323	319	318	311 → 
330	335	329	309
 → 336	332	330	352
341	368	355	310

 How many routes can she take?


PS

2a. Nuha and Pete are placing numbers in descending order.



300	200	100	350	250	150
-----	-----	-----	-----	-----	-----

Nuha



650	600	550	500	450	400
-----	-----	-----	-----	-----	-----


Pete

Who is correct? Prove it.




R

2b. Hunter and Willow are placing numbers in ascending order.



150	250	200	350	400	450
-----	-----	-----	-----	-----	-----

Hunter



150	300	450	600	750	900
-----	-----	-----	-----	-----	-----

Willow

Who is correct? Prove it.



PS

3a. Choose between 5 and 10 place value counters each time to create four 3-digit numbers.

100	100	10	1	1
100	100	10	1	1
100	100	10	1	
100	100	10		

Write the numbers that you have created below in ascending order.

_____ , _____ , _____ , _____



PS

3b. Using the place value counters below, create four different 3-digit numbers. You can reuse counters for each new number.

100	100	10	10	1	1	1
100	100	10	10	1	1	
100	10	10	1	1	1	

Write the numbers you have created below in descending order.

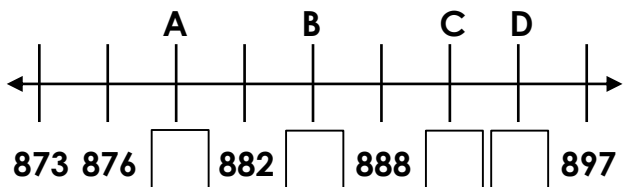
_____ , _____ , _____ , _____



R

Ordering Numbers

1a. Fill the gaps in the number line using the numbers below.



eight hundred and eighty-five

891

7 hundred s, 8 tens and 114 ones

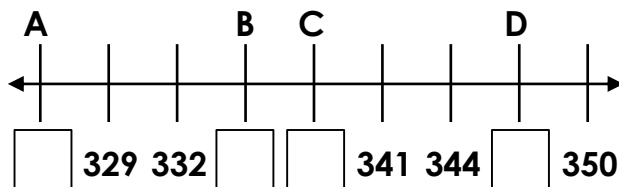
eight hundred and seventy-nine

VF



Ordering Numbers

1b. Fill the gaps in the number line using the numbers below.



347

three hundred and twenty-six

2 hundred s, 9 tens and 45 ones

33 tens and 8 ones

VF



2a. Put these values in ascending order.

200, 28 tens and 3 ones	<input type="text"/>	700, 10 tens and 9 ones	seven hundred and forty-one	600, 23 tens and 4 ones
-------------------------	----------------------	-------------------------	-----------------------------	-------------------------



VF

2b. Put these in descending order.

six hundred and two	<input type="text"/>	500, 10 tens and 112 ones	200, 42 tens and 1 one	100, 38 tens and 11 ones
---------------------	----------------------	---------------------------	------------------------	--------------------------



VF

3a. What is each representation worth?

		one hundred, 38 tens and 10 ones	$400 + 119$
A =	B =	C =	D =

List the numbers in descending order.



VF

3b. What is each representation worth?

seven hundred and ninety-four	$600 + 231$		
A =	B =	C =	D =

List the numbers in ascending order.



VF

4a. True or false? Callum has placed these six numbers in ascending order.

- | |
|---------------------------------|
| 8 hundreds, 10 tens and 73 ones |
| nine hundred and seventy-six |
| 98 tens and 1 one |
| 984 |
| 6 hundreds, 38 tens and 9 ones |
| nine hundred and eighty-eight |



VF

4b. True or false? Jemma has placed these six numbers in descending order.



- | |
|--------------------------------|
| 41 tens and 7 ones |
| 2 hundreds, 7 tens and 37 ones |
| three hundred and one |
| two hundred and ninety-six |
| 1 hundred, 18 tens and 9 ones |
| 272 |



VF

Ordering Numbers

1a. Rigby the racoon wants to reach the cherries. He can only travel in the maze by finding up to 6 ascending numbers.



 806	800 + thirteen	700 + 139	868
7 hundreds, 9 tens and 22 ones	83 tens and 1 one	838	664 + 200
810 + 44	nine hundred and twenty	900 + seventeen	nine hundred and three
8 hundreds, 10 tens and 21 ones	917	6 hundreds, 33 tens and 9 ones	

 How many routes can he take?

PS

Ordering Numbers


1b. Binky the rabbit wants to reach the carrot. She can only travel in the maze by finding up to 6 descending numbers.


322	300 + 15	three hundred and thirty	200 + 171
350 + 35	363	three hundred and forty	32 tens and 5 ones
2 hundreds, 10 tens and 71 ones	300 + 68	352	
 200 + 186	372	1 hundred, 21 tens and 9 ones	300 + 8

 How many routes can she take?

PS

2a. Leon and Toria are placing numbers in descending order.

 Leon	500 + 163	418	400 and two ones	200 + 60 + 138	300 + ninety ones	200 + 19 tens + 1
---	-----------	-----	------------------	----------------	-------------------	-------------------


 Toria	298	100 + 18 tens + 7 ones	210 + 43	200 + 3 tens + 19 ones	172	100 + 50
--	-----	------------------------	----------	------------------------	-----	----------


Who is correct? Prove it.



R

2b. Alessia and Kieran are placing numbers in ascending order.

 Alessia	500 + fifty-seven	521 + 40	568	400 + 182 ones	57 tens and 9 ones	500 + 90
---	-------------------	----------	-----	----------------	--------------------	----------

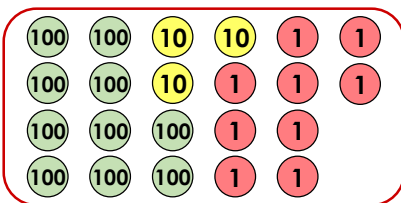
 Kieran	173	200 + 10 tens	481 + 100	300 + 39 tens + 2 ones	690 + 20	949
---	-----	---------------	-----------	------------------------	----------	-----

Who is correct? Prove it.



PS

3a. Choose between 5 and 10 place value counters each time to create six 3-digit numbers.



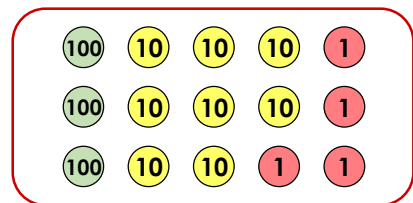
Write the numbers that you have created below in ascending order.

_____ / _____ / _____ / _____ / _____ / _____



PS

3b. Choose between 5 and 10 place value counters each time to create six 3-digit numbers.



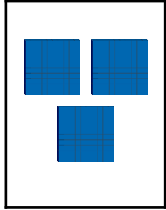


Write the numbers you have created below in descending order.




_____ / _____ / _____ / _____ / _____ / _____




R

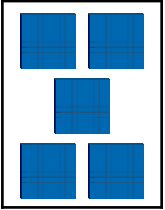


1a. Complete the number sentences.




A.  -  = 


B.  =  + 

 VF

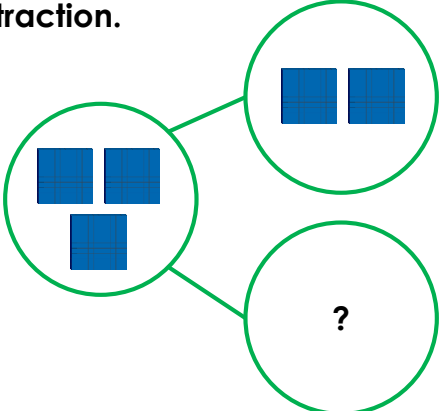
1b. Complete the number sentences.


A.  -  = 

B.  =  + 

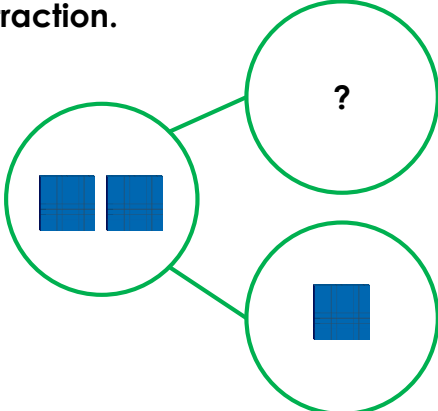
 VF


2a. Use the part whole model to write a subtraction.







 VF





2b. Use the part whole model to write a subtraction.




 VF





3a. Use the correct symbols to complete the number sentences.





A.  =   


B.    = 

 VF

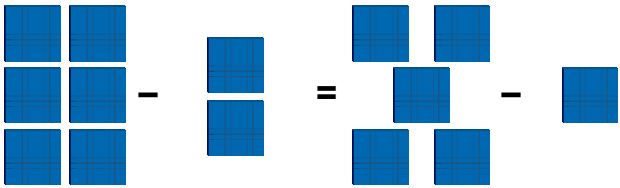
3b. Use the correct symbols to complete the number sentences.


A.    = 

B.  =   

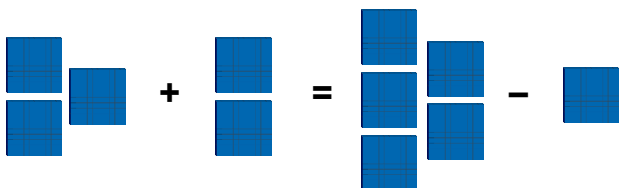
 VF


4a. True or false?



 VF

4b. True or false?

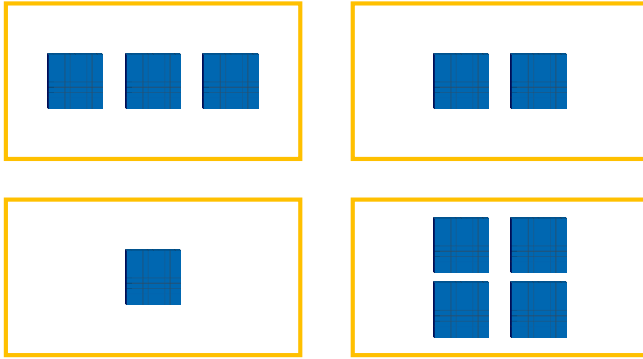


 VF

Add and Subtract Multiples of 100

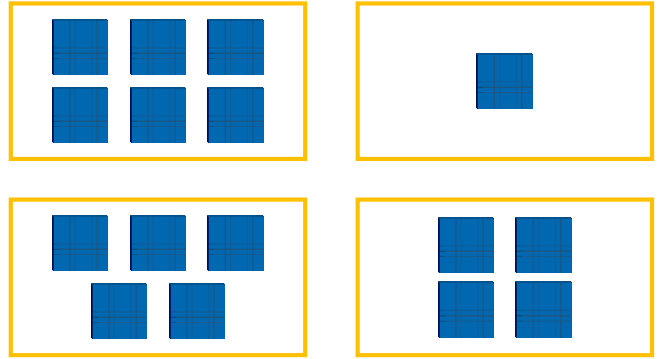
Add and Subtract Multiples of 100

1a. Use these cards to find all of the possible addition equations that will equal 1,000 or less.



PS

1b. Use these cards to find all of the possible subtraction equations that will equal 100 or more.



PS

2a. Find all of the possible values for A and B, where A and B are multiples of 100.

$$\text{■} + A + B = \begin{matrix} \text{■} & \text{■} \\ & \text{■} \\ \text{■} & \text{■} \end{matrix}$$



PS

2b. Find all of the possible values for A and B, where A and B are multiples of 100.

$$\begin{matrix} \text{■} & \text{■} & \text{■} \\ \text{■} & \text{■} & \text{■} \\ \text{■} & \text{■} & \text{■} \end{matrix} - A - B = \begin{matrix} \text{■} & \text{■} \\ \text{■} & \text{■} \end{matrix}$$



PS

3a. Kira and Cristal are adding multiples of 100.

$$? + \begin{matrix} \text{■} & \text{■} & \text{■} \end{matrix} = \begin{matrix} \text{■} & \text{■} \\ & \text{■} \\ \text{■} & \text{■} \end{matrix}$$



Kira

The missing number is 200.

The missing number is 800.



Cristal

Who is correct? Explain how you know.



R

3b. Hugh and Cole subtracting multiples of 100.

$$\begin{matrix} \text{■} & \text{■} & \text{■} \\ \text{■} & \text{■} & \text{■} \end{matrix} - ? = \begin{matrix} \text{■} & \text{■} \end{matrix}$$



Hugh

The missing number is 800.

The missing number is 400.



Cole

Who is correct? Explain how you know.



R


Add and Subtract Multiples of 100

Add and Subtract Multiples of 100

1a. Complete the number sentences.
Write your answers in numbers.

A. $\text{three hundreds} + \begin{matrix} \text{100} & \text{100} \\ \text{100} & \text{100} \\ \text{100} & \text{100} \end{matrix} = \square$


B. $\square = \begin{matrix} \text{100} & \text{100} \\ \text{100} \\ \text{100} & \text{100} \end{matrix} - 100$

 VF

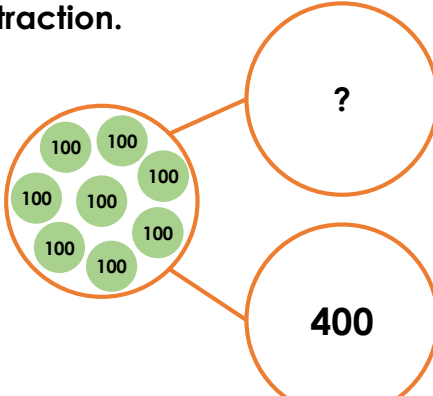
1b. Complete the number sentences.
Write your answers in numbers.


A. $\text{two hundreds} + \begin{matrix} \text{100} \\ \text{100} \\ \text{100} \end{matrix} = \square$

B. $\square = \begin{matrix} \text{100} \\ \text{100} \\ \text{100} & \text{100} \end{matrix} - 200$

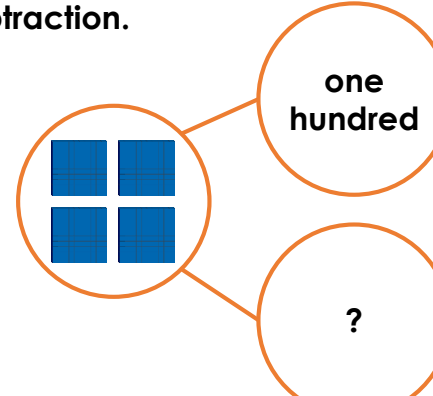
 VF


2a. Use the part whole model to write a subtraction.



 VF

2b. Use the part whole model to write a subtraction.




 VF

3a. Use the correct symbols to complete the number sentences.

A. $\begin{matrix} \text{100} & \text{100} & \text{100} \\ \text{100} & \text{100} & \text{100} \end{matrix} \square \text{ four hundreds} = \begin{matrix} \text{100} \\ \text{100} \end{matrix}$


B. $\text{100} = \begin{matrix} \text{100} & \text{100} \\ \text{100} \end{matrix} \square \begin{matrix} \text{100} & \text{100} \end{matrix}$

 VF

3b. Use the correct symbols to complete the number sentences.


A. $\begin{matrix} \text{100} & \text{100} \\ \text{100} \\ \text{100} & \text{100} \end{matrix} = \text{100} \square \begin{matrix} \text{100} & \text{100} \\ \text{100} & \text{100} \end{matrix}$

B. $600 \square \begin{matrix} \text{100} & \text{100} \\ \text{100} \end{matrix} = \begin{matrix} \text{100} & \text{100} \\ \text{100} \end{matrix}$

 VF


4a. True or false?

$100 + \begin{matrix} \text{100} & \text{100} & \text{100} \\ \text{100} \\ \text{100} & \text{100} & \text{100} \end{matrix} = \begin{matrix} \text{100} & \text{100} \\ \text{100} \\ \text{100} & \text{100} \end{matrix} + \begin{matrix} \text{100} \\ \text{100} \end{matrix}$

 VF

4b. True or false?

$\begin{matrix} \text{100} & \text{100} \\ \text{100} & \text{100} \\ \text{100} & \text{100} \end{matrix} - \text{two hundreds} = \text{100} \text{100} + \text{100} \text{100}$

 VF

Add and Subtract Multiples of 100

Add and Subtract Multiples of 100

1a. Use these cards to find all of the possible addition equations that will equal 1,000 or less.

		400
	one hundred	



PS

1b. Use these cards to find all of the possible subtraction equations that will equal 100 or more.

four hundreds		
	300	



PS

2a. Find all of the possible values for A and B, where A and B are multiples of 100.

$$\begin{array}{c} 100 \\ 100 \\ 100 \end{array} + A - B = 600$$



PS

2b. Find all of the possible values for A and B, where A and B are multiples of 100.

$$\text{nine hundreds} - A + B = \begin{array}{cc} \blacksquare & \blacksquare \\ \blacksquare & \blacksquare \end{array}$$



PS

3a. Sarah and Jane are subtracting multiples of 100.

$$\begin{array}{ccc} \blacksquare & \blacksquare & \blacksquare \\ \blacksquare & \blacksquare & \blacksquare \end{array} = ? - \text{one hundred}$$



Sarah

The missing number is 500.



Jane

The missing number is 700.

Who is correct? Explain how you know.



R

3b. Peter and Enzo are adding multiples of 100.

$$\begin{array}{ccc} 100 & 100 & 100 \\ & 100 & 100 \\ 100 & 100 & 100 \end{array} = \text{five hundreds} + ?$$



Peter

The missing number is 300.



Enzo

The missing number is 900.

Who is correct? Explain how you know.



R

Add and Subtract Multiples of 100

Add and Subtract Multiples of 100

1a. Complete the number sentences.
Write your answers in numbers.

A. $\boxed{700} - \boxed{400} = \boxed{}$

B. $\boxed{} = \boxed{\text{three hundreds}} + \boxed{\text{six hundreds}}$



VF

1b. Complete the number sentences.
Write your answers in numbers.

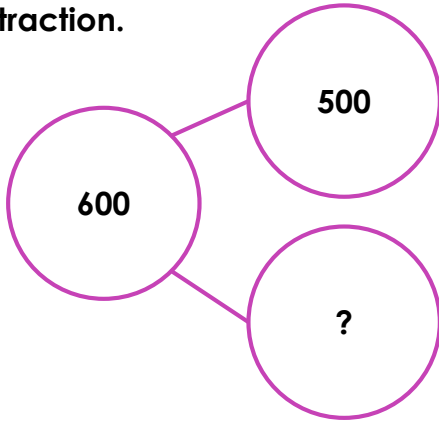
A. $\boxed{500} + \boxed{200} = \boxed{}$

B. $\boxed{} = \boxed{\text{eight hundreds}} - \boxed{\text{six hundreds}}$



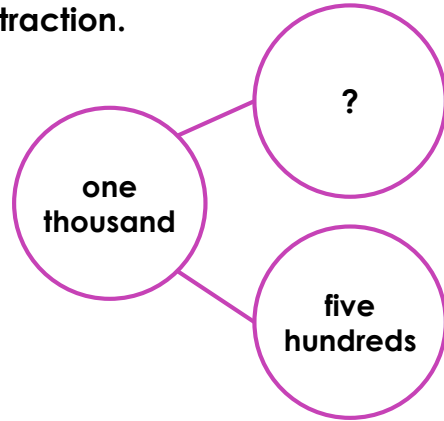
VF

2a. Use the part whole model to write a subtraction.



VF

2b. Use the part whole model to write a subtraction.



VF

3a. Use the correct symbols to complete the number sentences.

A. $\text{nine hundreds} = \text{six hundreds} \boxed{} \text{three hundreds}$

B. $1,000 \boxed{} 300 = 700$



VF

3b. Use the correct symbols to complete the number sentences.

A. $600 = 800 \boxed{} 200$

B. $\text{three hundreds} \boxed{} \text{three hundreds} = \text{six hundreds}$



VF

4a. True or false?

$600 + 200 = 500 + 300$



VF

4b. True or false?

$\text{three hundreds} - \text{one hundred} > \text{six hundreds} - \text{four hundreds}$



VF

Add and Subtract Multiples of 100

Add and Subtract Multiples of 100

1a. Use these cards to find all of the possible subtraction equations that will equal 100 or more.

900	500	seven hundreds
100	two hundreds	200



PS

1b. Use these cards to find all of the possible addition equations that will equal 1,000 or less.

two hundreds	600	one thousand
200	one hundred	400



PS

2a. Find all of the possible values for A, B and C, where A, B and C are multiples of 100.

$$100 + A - B + C = 300$$



PS

2b. Find all of the possible values for A, B and C, where A, B and C are multiples of 100.

$$300 + A - B - C = 600$$



PS

3a. Ashley and Kendal are adding multiples of 100.

$$1,000 = ? + 600$$



Ashley

The missing number is three hundreds.

The missing number is four hundreds.



Kendal

Who is correct? Explain how you know.



R

3b. Alan and Emmet are subtracting multiples of 100.

$$\text{nine hundreds} = \text{one thousand} - ?$$



Alan

The missing number is 100.

The missing number is 200.



Emmet

Who is correct? Explain how you know.



R

$36 \div 4$

2

$72 \div 4$

9

$48 \div 4$

18

$40 \div 4$

12

$24 \div 4$

10

$76 \div 4$

11

$4 \div 4$

19

$52 \div 4$

1

$32 \div 4$


13

$8 \div 4$

8

6	16 ÷ 4	15	28 ÷ 4
4	68 ÷ 4	7	80 ÷ 4
17	12 ÷ 4	20	64 ÷ 4
3	56 ÷ 4	16	20 ÷ 4
14	60 ÷ 4	5	44 ÷ 4

Converting Time Colour by Numbers



Match the clocks to the times and colour them the correct colour.



yellow



red



blue



pink



orange



yellow



red



purple



blue



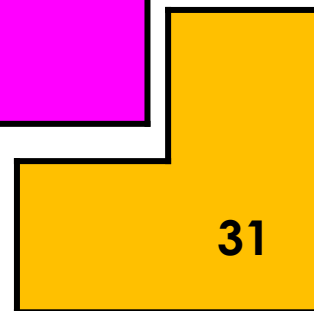
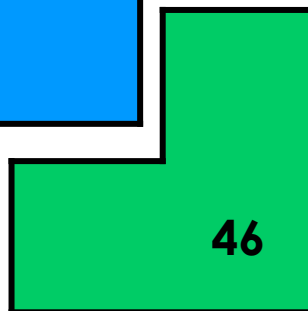


yellow

Now colour the rest of the picture.

The 3 Times Table

1. The grid displays different calculations from the 3 times tables. The sum of three different calculations will equal one of the numbers on the shapes.

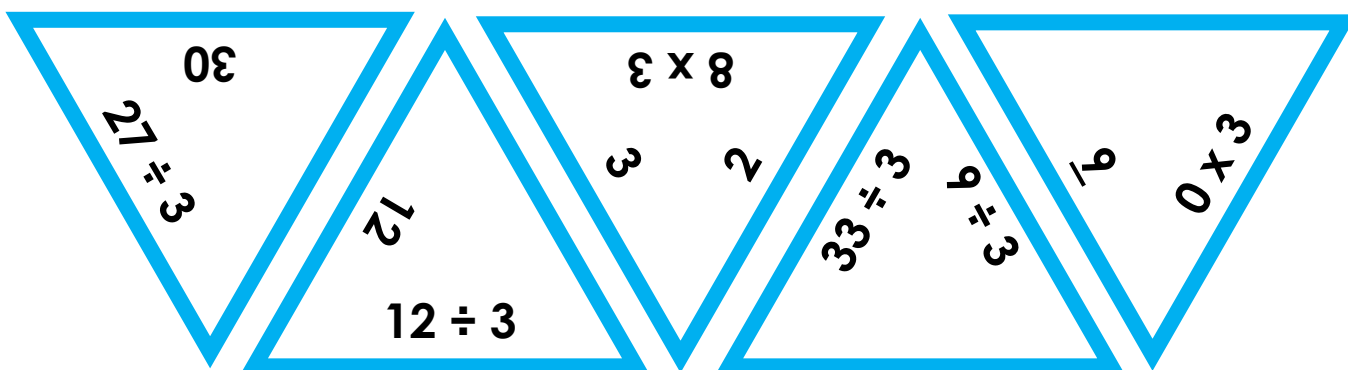
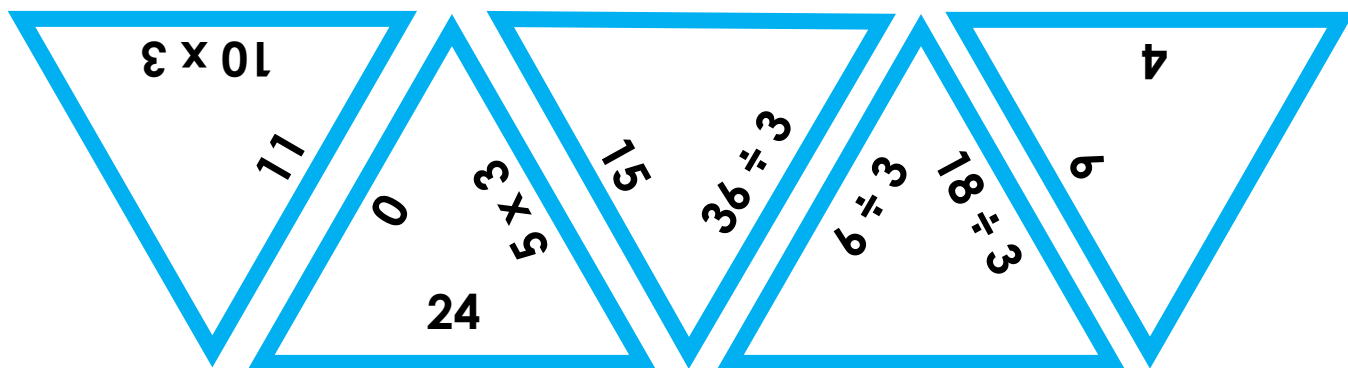
3×5	$21 \div 3$	$15 \div 3$	0×3
3×3	3×8	3×7	$3 \div 3$
$36 \div 3$	$33 \div 3$	3×9	3×6



Investigate how the shapes can be arranged on the grid by using your knowledge of the 3 times table and addition.

DP

2. Match the calculations to the correct answer.



DP

What is a Clause?

1a. Underline the verb and circle the nouns in the sentence below.

Michael hurt his knee in the playground.



VF

What is a Clause?

1b. Underline the verb and circle the nouns in the sentence below.

Diane washed her hair in the bathroom.



VF

2a. Punctuate the sentence below.

linda read her favourite story



VF

2b. Punctuate the sentence below.

the car moved very slowly



VF

3a. Tick the main clause below that makes sense on its own.

A. the dog could

B. the dog barked

C. the dog was



VF

3b. Tick the main clause below that makes sense on its own.

A. the boat sank

B. the boat flew

C. the boat's mast



VF

4a. True or false? The clause below is a main clause.

Our cow ran away.



VF

4b. True or false? The clause below is a main clause.

The lights went off in the museum.



VF

What is a Clause?

1a. Underline the noun and verb in the sentence below. Then, replace them with a different noun and verb.

We ate at the restaurant.



A

What is a Clause?

1b. Underline the noun and verb in the sentence below. Then, replace them with a different noun and verb.

I hopped on one leg.



A

2a. Use the words in the word bank to complete the sentences below.

made	swings
played	letter

- A. We _____ some ginger biscuits.
- B. The children played on the _____ .
- C. The postman delivered a _____ .



A

2b. Use the words in the word bank to complete the sentences below.

chose	puppy
spaces	sweets

- A. Sophie wanted a _____ for Christmas.
- B. There were no _____ left in the packet.
- C. The boy _____ tomatoes.



A

3a. Which sentence below doesn't make sense? Explain why.

- A. Her scarf was striped.
- B. We ordered a pizza.
- C. The fridge was broken.
- D. He laughed the guitar.



R

3b. Which sentence below doesn't make sense? Explain why.

- A. Our coach was angry.
- B. The window smashed.
- C. The parcel rang once more.
- D. I lost my hat today.



R

What is a Clause?

1a. Underline the verbs and circle the nouns in the sentence below.

The professional footballers ran, jumped and skipped around the pitch.



VF

What is a Clause?

1b. Underline the verbs and circle the nouns in the sentence below.

The light outside switched on in the middle of the night because a fox ran by.



VF

2a. Punctuate the sentence below.

did the ginger cat climb over the wooden fence



VF

2b. Punctuate the sentence below.

i can't believe that my teapot made twelve large cups of tea



VF

3a. Tick the main clause below that makes sense on its own.

A. the chips tasted lovely

B. those warm, curly chips taste

C. the chips tasted the girl



VF

3b. Tick the main clause below that makes sense on its own.

A. those clear river ran through

B. that winding river slowly

C. the wide river ran down the hill



VF

4a. True or false? The main clause in the sentence below is underlined.

Sally pushed through the trees and saw a light over the road.



VF

4b. True or false? The main clause in the sentence below is underlined.

After the tree was cut down, nobody wanted to go to the park.



VF

What is a Clause?

1a. Underline the nouns and verbs in the main clause below. Then, replace them with different nouns and verbs.

The robin flew out of the nest and didn't return for a few hours.



A

What is a Clause?

1b. Underline the nouns and verbs in the main clause below. Then, replace them with different nouns and verbs.

Dean crashed his brand new car when it snowed heavily.



A

2a. Use the words in the word bank to complete the main clauses below.

seem	does
drove	looked
flowers	room

- A. Don't walk on the _____ or you will be in trouble!
- B. We _____ around the quiet games _____ excitedly.
- C. Why _____ my cat _____ so sad after he's just eaten?



A

2b. Use the words in the word bank to complete the main clauses below.

car	room
dinosaur	hole
sprayed	coin

- A. I found a shiny _____ in my trouser pocket and I was surprised.
- B. I _____ the _____ to make it smell fresh before the guests came round.
- C. My _____ was very shiny and new so I kept it in the garage.



A

3a. Which main clause doesn't agree with the rest of the sentence? Explain why.

- A. It was a cold day today so the ice cream van was very quiet.
- B. Dad brushed his teeth very quickly.
- C. The detective didn't wear his thick coat because it was very frosty.
- D. Does your mum drive a red car now?



R

3b. Which main clause doesn't agree with the rest of the sentence? Explain why.

- A. Her hat was far too small for her head so it kept falling off.
- B. We slowly walked to school so we wouldn't be late again.
- C. The train was extremely crowded.
- D. My mum's car would not start today because it had run out of petrol.



R

What is a Clause?

1a. Underline the verbs and circle the nouns in the sentence below.

The little boy likes to take his dog for a long walk around the park on Sundays.



VF

What is a Clause?

1b. Underline the verbs and circle the nouns in the sentence below.

We travelled all through the night on a small coach and arrived at the hotel before breakfast.



VF

2a. Punctuate the sentence below.

in the holidays do you always go to the park with sarah and pete in before it gets too dark



VF

2b. Punctuate the sentence below.

if you want to reach the top of the eiffel tower in paris don't sleep in because the queues are huge



VF

3a. Tick the main clause below that makes sense on its own.

A. the final decision made

B. the last-minute decision was hastily made

C. the difficult decision that she would make



VF

3b. Tick the main clause below that makes sense on its own.

A. the large, green book spoke slowly

B. the white horse quickly escaped

C. the gentle horse sang clearly very



VF

4a. True or false? The main clause in the sentence below is underlined.

My mother bought me a red bike when I turned 11 and it was amazing!



VF

4b. True or false? The main clause in the sentence below is underlined.

Even though he knew it was wrong, Billy copied his best friend's answers.



VF

What is a Clause?

What is a Clause?

1a. Underline the nouns and verbs in the main clause below. Then, replace them with different nouns and verbs.

The huge, black spider
crawled out of the plughole
hastily and sped towards the
soap.



A

1b. Underline the nouns and verbs in the main clause below. Then, replace them with different nouns and verbs.

The cheeky elephant turned
around and squirted water
all over the crowd because
it was bored.



A

2a. Use sensible nouns, verbs and adjectives to complete the main clauses.

- A. The downstairs _____ was full of their children's _____ because their rooms were already full.
- B. The grey mouse ate the smelly _____ in the _____ because it was hungry.
- C. Michelle _____ her long and wavy hair in the mirror after she had washed it.



A

2b. Use sensible nouns, verbs and adjectives to complete the main clauses.

- A. Heavy snowfall _____ many _____ accidents on the main road as vehicles became stuck.
- B. The young _____ wore his woolly scarf on the _____ because he was very cold.
- C. The _____ placed the brown _____ into the overhead compartment before the plane took off.



A

3a. Which main clause doesn't agree with the rest of the sentence? Explain why.

- A. David badly hurt his hand whilst he was playing football with his friends on Saturday.
- B. Mrs Azeb's handwriting was particularly untidy when she was tired.
- C. At my school, you should always write in pen in mathematics so mistakes can be erased easily.
- D. Freda bought a new pencil case with her birthday money as it was pretty.



R

3b. Which main clause doesn't agree with the rest of the sentence? Explain why.

- A. The taxi driver collected the angry passengers late because there was a traffic jam.
- B. The regular bus turned up on time so my dad didn't have to walk into town.
- C. The taxi driver waited impatiently for twenty minutes before he left the area.
- D. The bus took its usual route around the empty town centre and picked up many elderly passengers.



R

Using Conjunctions to Express Time, Place and Cause

Using Conjunctions to Express Time, Place and Cause

1a. Sort the conjunctions under the correct headings.

Time	Place	Cause

where
because
before
so
wherever
after



VF

1b. Sort the conjunctions under the correct headings.

Time	Place	Cause

when
as
if
where
while
wherever



VF

2a. Tick the sentence with a causal conjunction.

- A. I am going shopping because I am bored at home.
- B. My Your coat is on the floor where you left it.
- C. I get dressed before I go to school.



VF

2b. Tick the sentence with a time conjunction.

- A. The children want to play outside if it is snowing.
- B. My brother reads his book before he goes to bed.
- C. The footballer takes her boots with her wherever she goes.



VF

3a. Rewrite this sentence using a different conjunction from the word bank.

Mohammed is upset as his best friend is moving away.

where
yet
because



VF

3b. Rewrite this sentence using a different conjunction from the word bank.

Julia enjoys watching TV after she gets home from school.

before
when
while



VF

4a. Create two sentences by matching clauses with the correct conjunction.

I set the table	so	dad cooked.
My friend was upset	while	I hugged him.



VF

4b. Create two sentences by matching clauses with the correct conjunction.

I like carrots	if	I stay up late.
I will be tired	but	I do not like peas.



VF

Using Conjunctions to Express Time, Place and Cause

Using Conjunctions to Express Time, Place and Cause

1a. Using the word bank, complete each sentence with a conjunction.

A. We enjoy going swimming _____ we have a great time in the water.

B. I like to spread the butter on my toast _____ it gets cold.

because while
where before



A

1b. Using the word bank, complete each sentence with a conjunction.

A. The magpie picks up shiny things _____ it goes.


B. It is almost bedtime _____ we need to get our pyjamas on.

when if
wherever so



A

2a. Write a sentence using a time conjunction to describe the picture below. Use the word bank to help you.



before when
if because



A

2b. Write a sentence using a causal conjunction to describe the picture below. Use the word bank to help you.



because after
due to wherever



A

3a. Sammy has been asked to write a sentence using a time conjunction.

	I played outside because it had
	finally stopped raining.

Is he correct? Explain your answer.



R

3b. Josie has been asked to write a sentence using a causal conjunction.

	We ran to the shop after we were
	picked up from school.

Is she correct? Explain your answer.



R

Using Conjunctions to Express Time, Place and Cause

Using Conjunctions to Express Time, Place and Cause

1a. Sort the conjunctions under the correct headings.

Time	Place	Cause

because where while
once since wherever



VF

1b. Sort the conjunctions under the correct headings.

Time	Place	Cause

where before wherever
in case yet when



VF

2a. Tick the sentence with a time conjunction.

- A. It is dark earlier due to the clocks going back an hour.
- B. My little brother takes his teddy with him wherever he goes.
- C. Adam ate his healthy snack while reading his favourite book.



VF

2b. Tick the sentence with a place conjunction.

- A. Dad hid the presents where the children wouldn't find them.
- B. I always take my umbrella with me in case it rains.
- C. My mum likes to iron while listening to music on the radio.



VF

3a. Rewrite this sentence using a different conjunction from the word bank.

I played outside with my raincoat on today due to the pouring rain.

in case

yet

because of



VF

3b. Rewrite this sentence using a different conjunction from the word bank.

I love going to my bedroom to change into my comfy clothes when I get home from school.

after

before

while



VF

4a. Create two sentences by matching clauses with the correct conjunction.

I took some money

while

I tidy up my bedroom.

My best friend helps

in case

I wanted to buy sweets.



VF

4b. Create two sentences by matching clauses with the correct conjunction.

I had some ice cream

after

I continued to play football.

My feet were sore

yet

I finished my dinner.



VF

Using Conjunctions to Express Time,
Place and Cause

Using Conjunctions to Express Time,
Place and Cause

1a. Complete each sentence with a conjunction.

A. We're very excited today _____ we're having a disco at school.

B. I always brush my teeth every morning _____ I've had my cereal and toast for breakfast.



A

1b. Complete each sentence with a conjunction.


A. My loyal dog waits patiently for me _____ I leave him alone in the house.

B. My dad was cutting my fringe with sharp scissors _____ I kept very still.



A

2a. Write a sentence with two expanded clauses and a place conjunction to describe the picture below.



A

2b. Write a sentence with two expanded clauses and a time conjunction to describe the picture below.



A

3a. Waheed has been asked to write a sentence using a causal conjunction.

My karate lesson was
cancelled yesterday due to
the teacher being poorly.

Is he correct? Explain your answer.



R

3b. Theo has been asked to write a sentence using a time conjunction.

My dad left the soft teddy where
my baby brother could reach it.

Is he correct? Explain your answer.



R

Using Conjunctions to Express Time, Place and Cause

Using Conjunctions to Express Time, Place and Cause

1a. Sort the conjunctions under the correct headings.

Time	Place	Cause

as soon as where meanwhile
since wherever therefore



VF

1b. Sort the conjunctions under the correct headings.

Time	Place	Cause

until unless where
wherever once consequently



VF

2a. Tick the sentence with a place conjunction.

- A. As it snowed heavily all night, no buses were running in the morning.
- B. The dastardly pirate hid his loot where his enemies would not find it.
- C. While I read my book, my sister played ball with our neighbour's dog.



VF

2b. Tick the sentence with a causal conjunction.

- A. The eager runners will set off as soon as the starting whistle blows.
- B. Wherever I go, my loyal dog obediently follows me.
- C. Due to my age, I was unable to go to see the scary film with my brother.



VF

3a. Rewrite this sentence using a different conjunction from the word bank.

As a result of the terrible weather forecast, tomorrow's football match has been cancelled.

due to

in case

before



VF

3b. Rewrite this sentence using a different conjunction from the word bank.

Since she has badly broken her foot, my mum has not been able to walk properly.

once

as

as soon as



VF

4a. Create two sentences by matching clauses with the correct conjunction.

The Vikings launched the attack

in case

their enemies retreated.

I need to take my mobile phone

until

I need to get a lift back home.



VF

4b. Create two sentences by matching clauses with the correct conjunction.

I drank the ice cold water

but

the birds took flight in fear.

The ferocious lion roared angrily

while

I still felt very thirsty.



VF

Using Conjunctions to Express Time,
Place and Cause

Using Conjunctions to Express Time,
Place and Cause

1a. Complete each sentence with a conjunction.

A. The plants were withering and dying _____ the cattle had nothing to eat and were starving to death.

B. _____ Olivia had drunk all her diluted orange juice, she finished eating her delicious cheese sandwich.



A



A

2a. Write a sentence starting with a time conjunction and with two expanded clauses to describe the picture below.



A



A

2b. Write a sentence starting with a place conjunction and with two expanded clauses to describe the picture below.



3a. Aliza has been asked to write a sentence using a causal conjunction.

The monsoon season in India lasts
for several months, therefore the
plants grow very quickly.

Is she correct? Explain your answer.



R



R

3b. Katie has been asked to write a sentence using a time conjunction.

Until global warming is reversed
by all countries working together,
our weather will continue to be
unpredictable.

Is she correct? Explain your answer.

Italian Ice Cream with Friends



Visit [kids.classroomsecrets.co.uk](https://www.classroomsecrets.co.uk) for online games to support learning.



Italian Ice Cream with Friends – Follow-Up Work

1. How do you know the three female ladies are retired? (P5/2d)

2. How do you know the female ladies are very good friends? (P5/2d)

3. How do you know the setting for this picture is in Italy? (P5/2d)

4. What season do you think this image was taken in? (P5/2d)

5. Why are the ladies standing up to eat their ice-cream? (P5/2d)

6. Have you ever eaten an ice-cream when you have been on holiday?

Italian Ice Cream with Friends – Vocab

Write the definitions for each of these words.

active	
culture	
edible	
female	
gelato	
horizontal	
indulgence	
mature	
produce	
retirement	
senior	
sunlight	
togetherness	
tourism	
vacation	
waist	

Dream Holidays

Barbados is an island in the Caribbean. It is famous for its white sandy beaches and clear blue water. It is also well-known for playing cricket and eating afternoon tea. Barbados is the perfect place to visit if you enjoy relaxing in the sunshine.



Wilton Barbados Resort

Rating: ★★★★★

Location: Bridgetown

Facilities: 2 private beaches, 5 restaurants, 3 outdoor pools, 1 enormous water slide, kids club, WiFi
Sights: Limestone Cavern and the Barbados Museum

Price: £82 per person, per night

Offers: Breakfast is included

Coconut Tree Hotel

Rating: ★★★★★

Location: Christ Church

Facilities: 1 public beach, 2 restaurants, 1 outdoor pool, soft play area, games room, sea views, WiFi

Sights: Historic buildings and stunning coastline

Price: £56 per person, per night

Offers: Free bathrobes



White Sands Beach Resort

Rating: ★★★★★

Location: Fitts Village

Facilities: 1 private beach, 3 restaurants, 2 outdoor pools, dive and snorkel centre, horse riding, car and bike hire, hot tub, WiFi

Sights: Paradise Beach

Price: £72 per person, per night

Offers: Book now and get 2 nights free

Dream Holidays – Comprehension

Section A

These hotels are on the island of...

Britain

Bermuda

Barbados

Barra

Wilton Barbados Resort has got...

2 stars

3 stars

4 stars

5 stars

White Sands Beach Resort is in...

Christ Church

Fitts Village

Bridgetown

Bermuda

The Coconut Tree Hotel has a...

soft play area

snorkel centre

water slide

riding school

Barbados well-known for playing...

football

rugby

snooker

cricket

If you stay at the Wilton Barbados Resort, you can visit the...

airport

museum

riding stables

dive centre

Section B

Use the information in the text to decide whether these statements are true or false.

	True	False
Barbados is famous for its white, sandy beaches.		
Barbados is the place to visit if you enjoy staying indoors.		
The Wilton Barbados Resort has 2 private beaches.		
The Coconut Tree Hotel has 2 outdoor pools.		
White Sands Beach Resort has 4 restaurants.		
Barbados is well-known for eating afternoon tea.		

Section C

Complete this chart using information from the text.

Hotel	Cost	Facilities	Offers
Wilton Barbados Resort			
	£56		Free bathrobes
		1 beach, 3 restaurants, 2 outdoor pools, dive and snorkel centre, horse riding, car and bike hire, WiFi	

Section D

Find and copy a word that means the same as 'famous'.

Find and copy a word in the text that means the same as 'beautiful'.

Find and copy a word in the text that means the same as 'not public'.

Find and copy a word in the text that means the same as 'old'.

Statutory Spellings in Sentences Year 3/4 1

Use this bank of words to complete the next 5 sentences.

forward thought bicycle often sentence

Terry _____ the ballet was amazing.

Anette was asked to recall what the Doctor had said in one _____.

It rains _____ in England.

Rob's robot moved _____ with one push of the button.

The _____ in the shop had a shiny bell and rubber handles.

Use this bank of words to complete the next 6 sentences.

history address answer forwards material ordinary

Thomas was just an _____ boy with an extraordinary personality.

Sarah wrote the _____ on the envelope.

James thought carefully about his _____ to the problem.

Mary chose some _____ for her dressmaking.

Paul's _____ book was all about the Tudors.

The swing swung _____ and backwards with just one push.